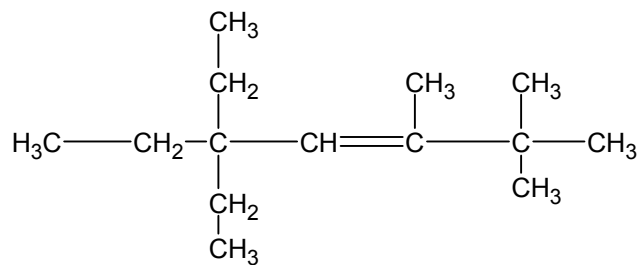
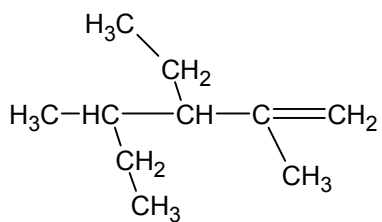
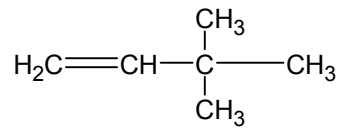
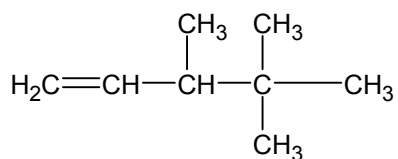
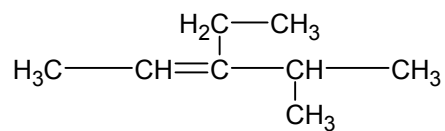
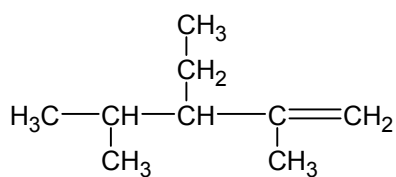
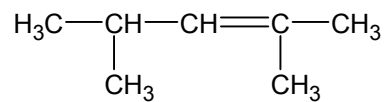
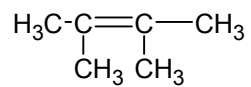


## Naming Alkenes Worksheet



## Naming Alkenes Worksheet #2

Draw the structural formula for each of the following:

2-ethyl-1-pentene

2,3-dimethyl-1-butene

2,3,4 – trimethyl-1-hexene

2-ethyl-3,4-dimethyl-2-pentene