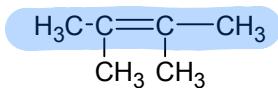
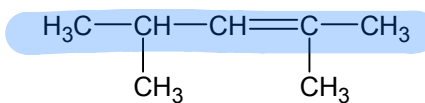


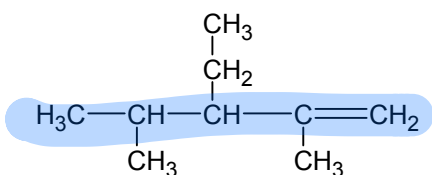
Naming Alkenes Worksheet



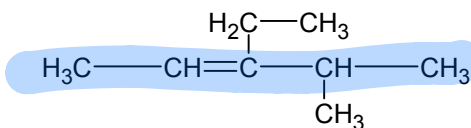
2,3-dimethyl-2-butene



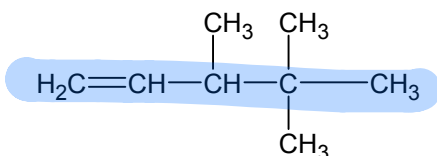
2,4-dimethyl-2-pentene



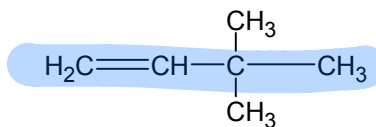
3-ethyl-2,4-dimethyl-1-pentene



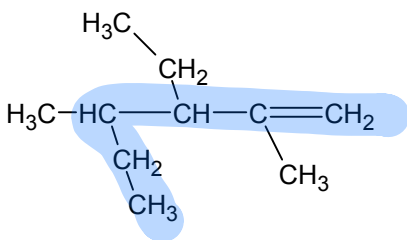
3-ethyl-4-methyl-2-pentene



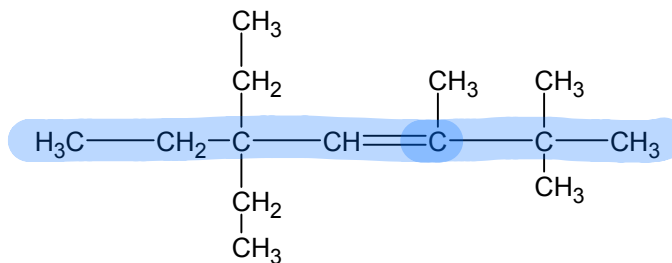
3,4,4-trimethyl-1-pentene



3,3-dimethyl-1-butene



3-ethyl-2,4-dimethyl-1-hexene



5,5-diethyl-2,2,3-trimethyl-3-hexene

Naming Alkenes Worksheet #2

Draw the structural formula for each of the following:

2-ethyl-1-pentene



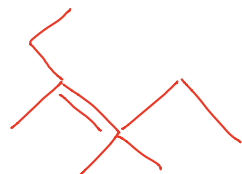
2,3-dimethyl-1-butene



2,3,4-trimethyl-1-hexene



2-ethyl-3,4-dimethyl-2-pentene



This is actually doesn't make sense...

Do you know why?