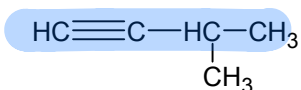
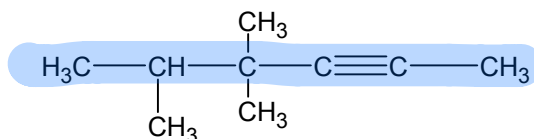


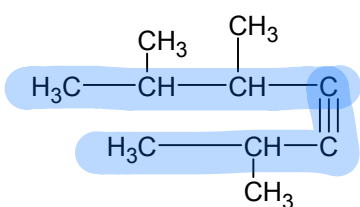
Naming Alkynes Worksheet #1



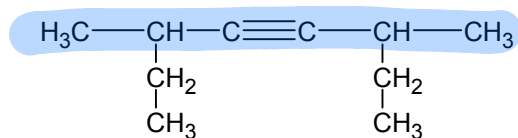
3-methyl-1-butyne



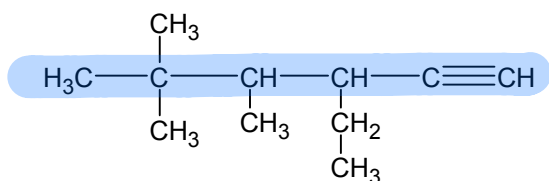
4,4,5-trimethyl-2-hexyne



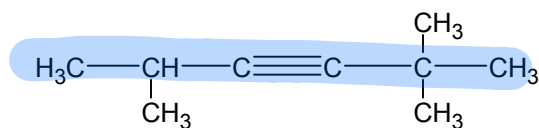
2,5,6-trimethyl-3-heptyne



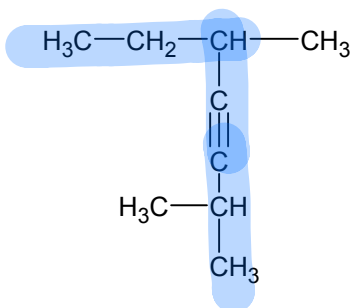
2,5-diethyl-3-hexyne



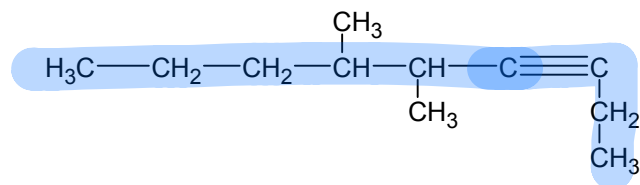
3-ethyl-4,5,5-trimethyl-1-hexyne



2,2,5-trimethyl-3-hexyne



2,5-dimethyl-3-heptyne



5,6-dimethyl-3-nonyne

Naming Alkynes Worksheet #2

Draw the structural formula for each of the following:

3-ethyl-1-pentyne



3,3-dimethyl-1-butyne



4,4,5-trimethyl-2-hexyne



4-ethyl-4-methyl-2-pentyne

