

Cycloalkanes

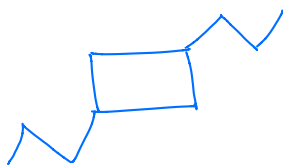
Name: *Key*

Date:

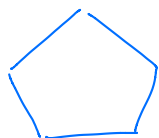
1.		<i>Cyclodecane</i>
2.		OMIT!!
3.		<i>3,5-diethyl-1,3-dimethyl cyclohexane</i>
4.		<i>1-ethyl-2-methyl-1,3-dipropyl cyclopentane</i>
5.		<i>3-butyl-2,2-dimethyl-2-propyl cyclohexane</i>
6.		<i>1,3-diethyl-cyclohexane</i>
7.		<i>1,2-dimethyl- cyclopropane</i>

Draw the condensed structural formula for the following organic compounds:

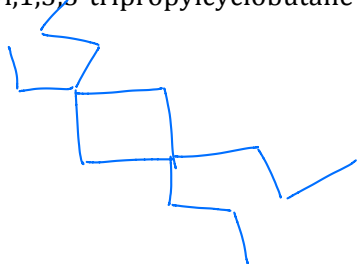
8. 1,3-dipropylcyclobutane



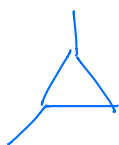
9. cyclopentane



10. 1-ethyl,1,3,3-tripropylcyclobutane



11. 1,2-dimethylcyclopropane



12. 1,3-dipropylcyclodecane

